

Name _____

A penny is worth one cent.

Trace the sentence.

A penny is worth
one cent.


Write the sentence.

Trace the words and color the pictures.



one

cent



five

cents

Name _____

One nickel is equal to five pennies.

Trace the sentence.

One nickel is equal
to five pennies.

Write the sentence.

Trace the words and color the pictures.



one nickel =

five pennies



Name _____

One dime is equal to ten pennies.

Trace the sentence.

One dime is equal
to ten pennies.



Write the sentence.

Trace the words and color the pictures.



one dime =


ten pennies



Name _____

Draw a line from the quarters on the right to any quarter on the left.

I'm a Quarter!



Name _____

You are given the following coins.

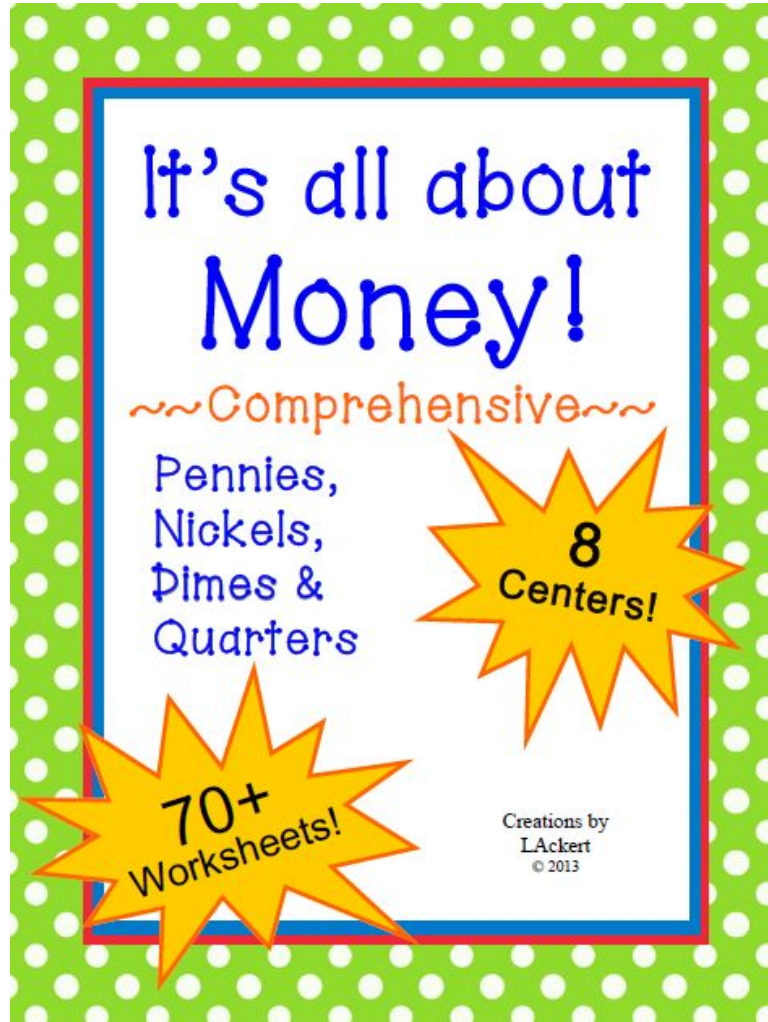


Complete the graph showing how many of each coin you have.

5			
4			
3			
2			
1			
	Pennies	Nickels	Dimes

Now count your money. How much money do you have?





These pages are part of a HUGE Money unit called "It's All About Money". CHSH Download Club subscribers can download the entire unit @ <http://www.christianhomeschoolhub.com/pt/Learning-about-Money/wiki.htm>